

Question

Use the Submit -> Forward button to save your answer and move to the next question.

Calculator

- 9) A company is looking to recruit a person for a one-off project for a specified period. Which of the following types of contract would it offer
- A) Permanent contract
 - B) Flexi-time contract
 - C) Part-time contract
 - D) Fixed term contract

Submit -> Forward

Stop and Restart/Resume List

19/2020

Users have been disabled for this

another page from this window.



ong

Add to



Petroleum Development Company | Test - SEPLAT JV Undergraduate Scholarship Screening Test 2019/2020 - Google Chrome

testcom.net/app/my/SeplatTestLaunchForm.cfm

Instructions

Question

Use the Submit -> Forward button to save your answer and move to the next question.

Calculator

27) If an article is sold at 8% gain instead of 8% loss, it would have bought ₦12 more. Find out the cost price of the article.

- A) ₦75
- B) ₦72
- C) ₦60
- D) ₦70

Submit -> Forward

Close and Restart



NPDC/SEPLAT Undergraduate Scholarship Screening Test 2018/2019

Time Remaining (minutes:seconds) : 13:25

ress
have completed 23 out of 30 questions.

structions +

tion
the Submit -> Forward button to save your answer and move to the next question.

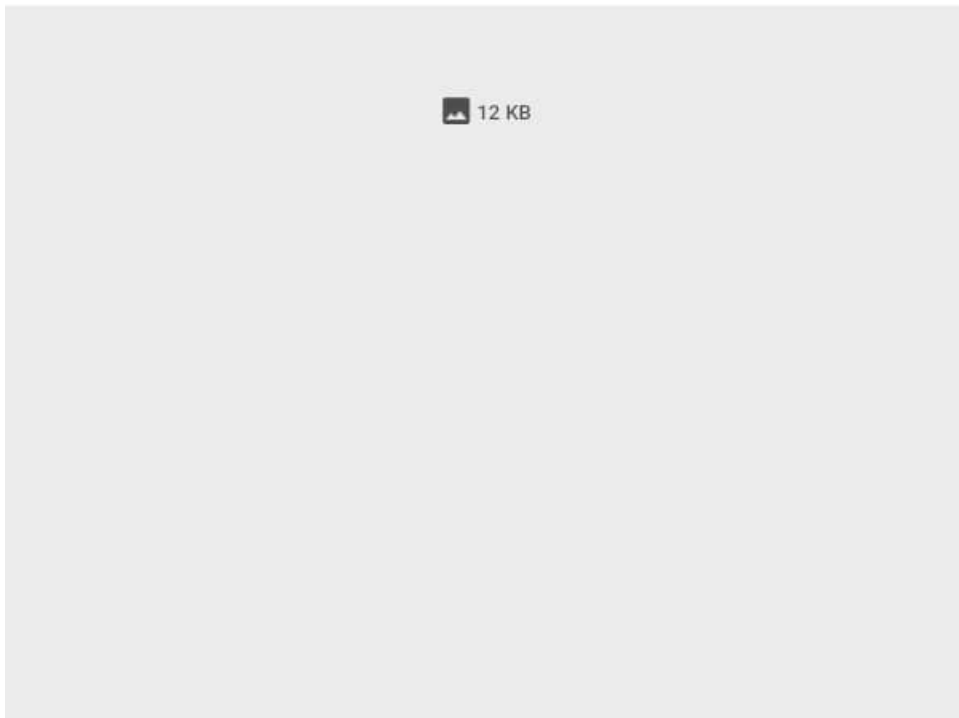
ase Wait...

A box contains 4 red balls, 5 green balls and 6 white balls. A ball is drawn at random from the box. What is the probability that the ball drawn is either red or green?

- A) 2/5
- B) 3/5
- C) 1/5
- D) 7/15

ase Wait...

Please Wa



4 KB

Test - NPDC/SEPLAT Undergraduate Scholarship Screening Test 2018/2019

You are taking the following test:

Name NPDC/SEPLAT Undergraduate Scholarship Screening Test 2018/2019

Timer Time Remaining (minutes:seconds): 25:47

Progress You have completed 14 out of 30 questions.

Instructions

Question Use the Submit -> Forward button to save your answer and move to the next question.

Please Wait...

15) 0, 3, 8, 15, (?), 35, 48

- A) 20
- B) 24
- C) 22
- D) 26

Please Wait...

Please Wait...

12 KB

4 KB

Test - NPDC/SEPLAT Undergraduate Scholarship Screening Test 2018/2019

You are taking the following test:

Name NPDC/SEPLAT Undergraduate Scholarship Screening Test 2018/2019

Timer Time Remaining (minutes:seconds) : 28:26

Progress You have completed 11 out of 30 questions.

Instructions

Question Use the Submit -> Forward button to save your answer and move to the next question.

Please Wait...

12) 4, 6, 9, 14, 21, 32, 7

- A) 54
- B) 43
- C) 56
- D) 45

Please Wait...

Please Wait...

12 KB

Name NPDC/SEPLAT Undergraduate Scholarship Screening Test 2018/2019

Timer Time Remaining (minutes:seconds) : 22:49

Progress
You have completed 18 out of 30 questions.

Instructions +

Question
Use the Submit -> Forward button to save your answer and move to the next question.

Please Wait...

19) He _____ the cards among the players.

- A) deals with
- B) deals by
- C) deals out
- D) deals in

Please Wait...

Please Wait...

12 KB

▼ Test -

You are taking the following test:

Name NPDC/SEPLAT Undergraduate Scholarship Screening Test 2018/2019

Timer Time Remaining (minutes:seconds) : 8:04

Progress
You have completed 26 out of 30 questions.

→ Instructions +

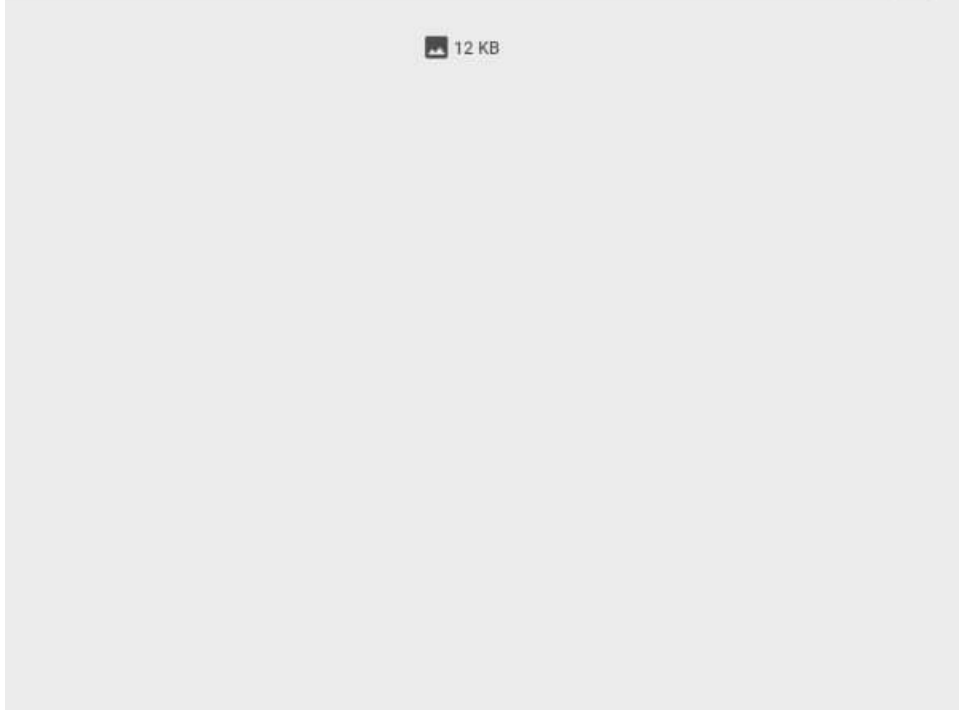
Question
Use the Submit -> Forward button to save your answer and move to the next question.

Calculator

27) The average age of 36 students in a group is 14 years. When the teacher's age is included, the average increases by one. What is the teacher's age in years?

- A) 31
- B) 36
- C) 51
- D) Cannot be determined
- E) 40

Submit -> Forward Stop and Restart/Resume Later



📄 12 KB

are taking the following test:

NPDC/SEPLAT Undergraduate Scholarship Screening Test 2018/2019

Time Remaining (minutes:seconds) : 17:40

Questions completed 21 out of 30 questions.

Instructions +

Click on the Submit -> Forward button to save your answer and move to the next question.

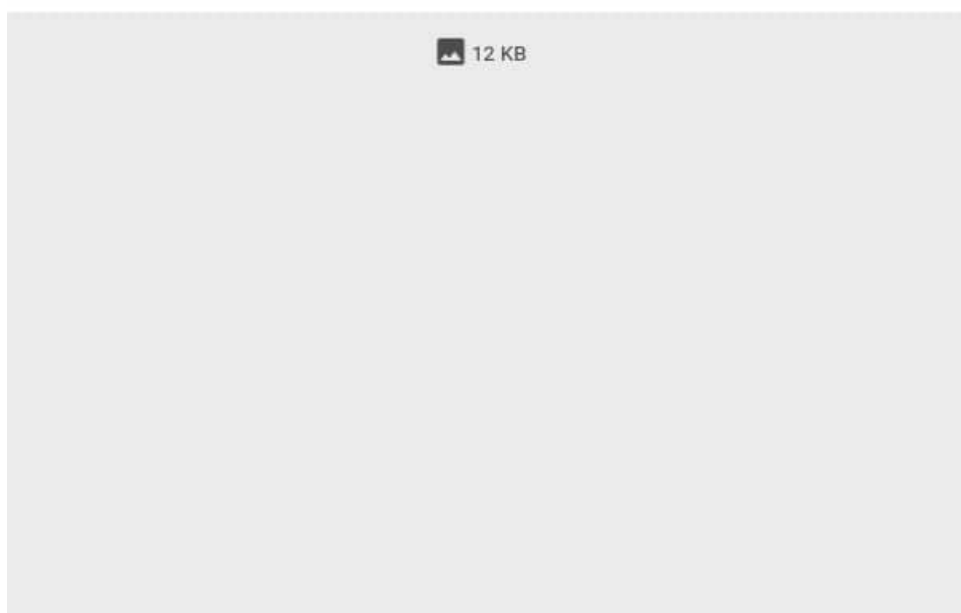
Calculator

Two cars P and Q start at the same time from A and B which are 120km apart. If the two cars travel in opposite directions, they meet after one hour and if they travel in same direction (from A towards B), then P meets Q after 2 hours. What is the speed of car P?

- A) 60kmph
- B) 70kmph
- C) 120kmph
- D) Data inadequate
- E) None of these

Submit -> Forward

Stop and Restart/Resume La



12 KB

Name NPDC/SEPLAT Undergraduate Scholarship Screening Test 2018/2019

Timer Time Remaining (minutes:seconds) : 42:26

Progress
You have completed 3 out of 30 questions.

Instructions +

Question
Use the Submit -> Forward button to save your answer and move to the next question.

Calculator

- 4) Throughout the 1950's, there were increases in the numbers of dead birds found in agricultural areas after pesticide sprayings. Pesticide manufacturers claimed that the publicity given to bird deaths stimulated volunteers to look for dead birds, and that the increase in numbers reported was attributable to the increase in the number of people looking. Which of the following statements, if true, would help to refute the claim of the pesticide manufacturers?
- A) The publicity given to bird deaths was largely regional and never reached national proportions.
 - B) Pesticide sprayings were timed to coincide with various phases of the life cycles of the insects they destroyed.
 - C) No provision was made to ensure that a dead bird would not be reported by more than one observer.
 - D) Initial increases in bird deaths had been noticed by agricultural workers long before any publicity had been given to the matter.

Submit -> Forward

Stop and Restart/Resume Later

Name NPDC/SEPLAT Undergraduate Scholarship Screening Test 2018/2019

Timer Time Remaining (minutes:seconds) : 23:45

Progress
You have completed 17 out of 30 questions.

> Instructions +

Question
Use the Submit -> Forward button to save your answer and move to the next question.

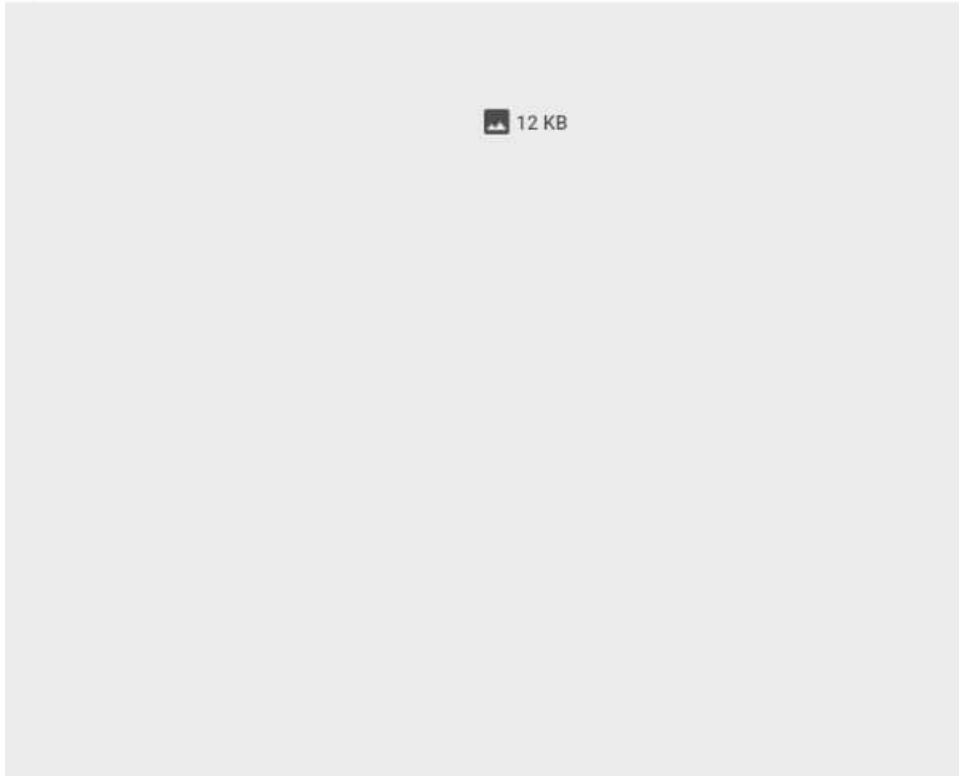
Please Wait...

18) There is pleasure in _____ a debtor which none but a creditor can know

- A) doing with
- B) doing up
- C) doing for
- D) doing away with

Please Wait...

Please W



12 KB

NPDC/SEPLAT Undergraduate Scholarship Screening Test 2018/2019

Time Remaining (minutes:seconds) : 14:09

Progress: You have completed 23 out of 30 questions.

Instructions +

Navigation: Click the Submit -> Forward button to save your answer and move to the next question.

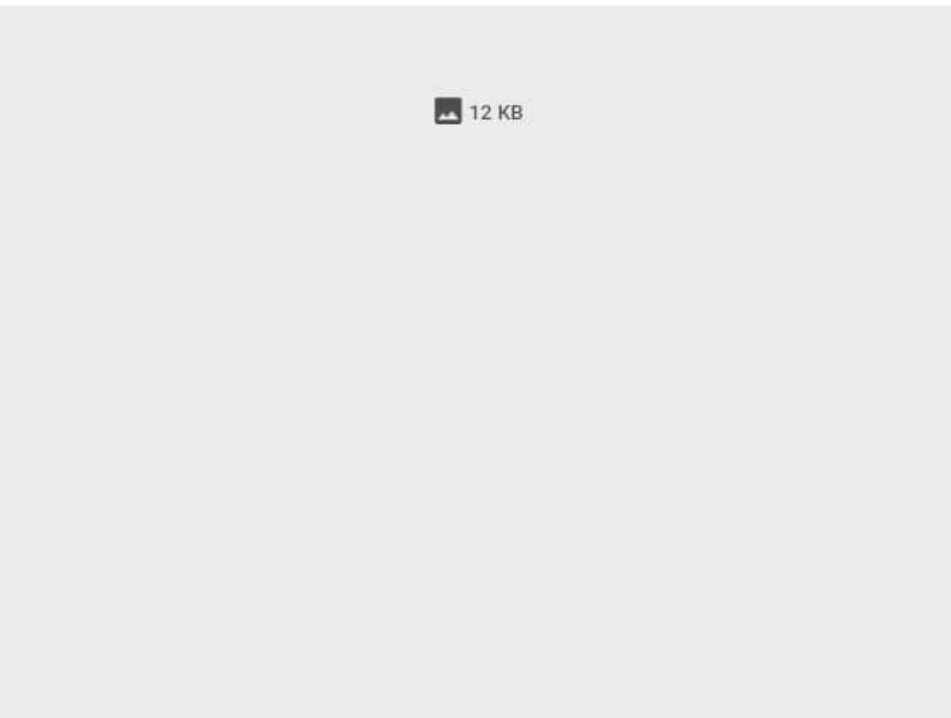
Calculator

A box contains 4 red balls, 5 green balls and 6 white balls. A ball is drawn at random from the box. What is the probability that the ball drawn is either red or green?

- A) 2/5
- B) 3/5
- C) 1/5
- D) 7/15

Submit -> Forward

Stop and Restart/Resume La



12 KB

NPDC/SEPLAT Undergraduate Scholarship Screening Test 2018/2019

Time Remaining (minutes:seconds) : 14:53

Questions completed 22 out of 30 questions.

Actions +

Submit -> Forward button to save your answer and move to the next question.

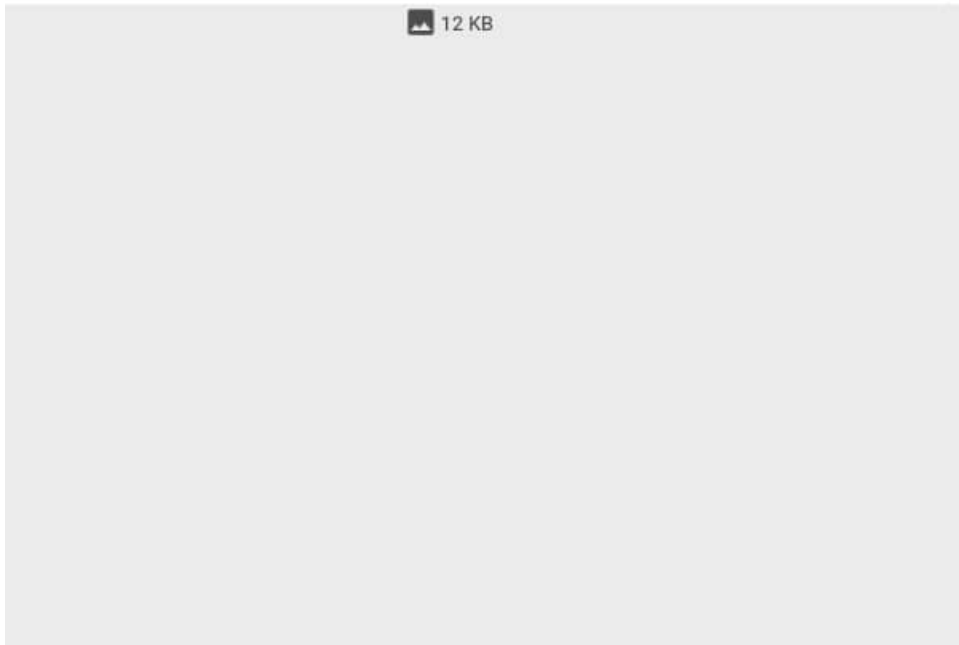
Calculator

The MegaTek Corporation is displaying its distribution of employees by department in a circle graph. The size of each sector of the graph representing a department is proportional to the percentage of total employees in that department. If the section of the circle graph representing the manufacturing department takes up 720 of the circle, what percentage of MegaTek employees are in manufacturing?

- A) 20%
- B) 25%
- C) 30%
- D) 35%
- E) 72%

Submit -> Forward

Stop and Restart/Resume Later



Timer Time Remaining (minutes:seconds) : 38:56

Progress
You have completed 6 out of 30 questions.

> Instructions +

Question
Use the Submit -> Forward button to save your answer and move to the next question.

Calculator

7) Which of the following would not form part of the contract of employment?

- A) Period of notice
- B) Frequency of payments
- C) Holidays entitlement
- D) Marital status

Submit -> Forward

Stop and Restart/Resu

NPDC/SEPLAT Undergraduate Scholarship Screening Test 2018/2019

Time Remaining (minutes:seconds) : 11:25

press
have completed 25 out of 30 questions.

Instructions +

Question
the Submit -> Forward button to save your answer and move to the next question.

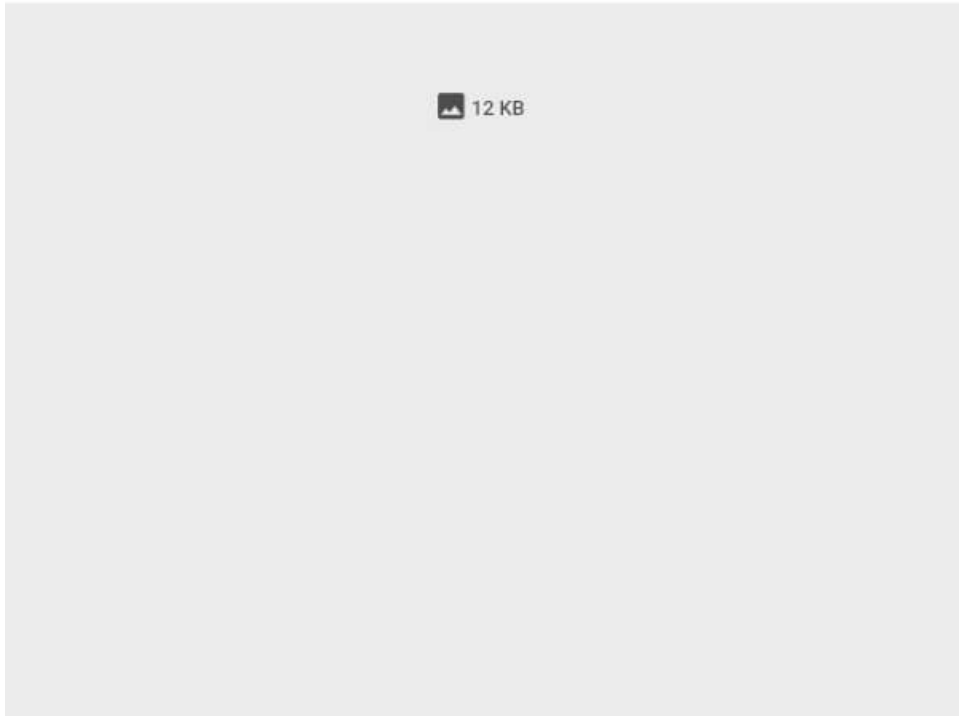
Calculator

In a case, 30% of the students offered English, 20% offered French and 10% offered both. If a student is selected at random, what is the probability

- A) 2/5
- B) 1/4
- C) 3/5
- D) 3/10

Submit -> Forward

Stop and Restart/Resume Later



4 KB

Test - NPDC/SEPLAT Undergraduate Scholarship Screening Test 2018/2019

Test -

You are taking the following test:

Name: NPDC/SEPLAT Undergraduate Scholarship Screening Test 2018/2019

Timer: Time Remaining (minutes:seconds) : 20:12

Progress: You have completed 20 out of 30 questions.

Instructions +

Question

Click the Submit -> Forward button to save your answer and move to the next question.

Calculator

1) A man buys ₦20 shares paying 9% dividend. The man wants to have an interest of 12% on his money. The market value of each share is:

- A) ₦12
- B) ₦15
- C) ₦18
- D) ₦21

Submit -> Forward

Stop and Restart/Resume Later

12 KB

4 KB

Test - NPDC/SEPLAT Undergraduate Scholarship Screening Test 2018/2019

You are taking the following test:

Name NPDC/SEPLAT Undergraduate Scholarship Screening Test 2018/2019

Timer Time Remaining (minutes:seconds): 27:15

Progress You have completed 12 out of 30 questions.

Instructions

Question Use the Submit -> Forward button to save your answer and move to the next question.

Please Wait...

13) 3, 8, 15, 24, 35, 7

- A) 44
- B) 45
- C) 47
- D) 48

Please Wait...

Please Wait...

12 KB

You are taking the following test:

Name NPDC/SEPLAT Undergraduate Scholarship Screening Test 2018/2019

Timer Time Remaining (minutes:seconds) : 21:52

Progress
You have completed 19 out of 30 questions.

Instructions +

Question
Use the Submit -> Forward button to save your answer and move to the next question.

Please Wait...

20) We should _____ with the dowry practice

- A) do with
- B) do up
- C) do for
- D) do away with

Please Wait...

Pl

12 KB

You are taking the following test:

Name NPDC/SEPLAT Undergraduate Scholarship Screening Test 2018/2019

Timer Time Remaining (minutes:seconds) : 33:59

Progress

You have completed 10 out of 30 questions.

> Instructions +

Question

Use the Submit -> Forward button to save your answer and move to the next question.

Calculator

- 11) 6, 7, 5, ?, 4, 9
- A) 3
 - B) 7
 - C) 8
 - D) 9

Submit -> Forward

Stop and Restart/Resume La



Seplat Petroleum Development Company Plc

Test - NPDC/SEPLAT Undergraduate Scholarship Screening Test 2018/2019

Test -
You are taking the following test:

Name NPDC/SEPLAT Undergraduate Scholarship Screening Test 2018/2019

Timer Time Remaining (minutes:seconds): 43:56

Progress
You have completed 1 out of 30 questions.

Instructions +

Question
Use the Submit -> Forward button to save your answer and move to the next question.

Calculator

- 2) Which of the following sectors would the NHS be part of?
- A) private sector
 - B) Public sector
 - C) Voluntary sector
 - D) Industrial sector

Submit -> Forward

Stop and Restart/Resume Later

are taking the following test:

NPDC/SEPLAT Undergraduate Scholarship Screening Test 2018/2019

Time Remaining (minutes:seconds) : 15:15

have completed 21 out of 30 questions.

Instructions +

Submit -> Forward button to save your answer and move to the next question.

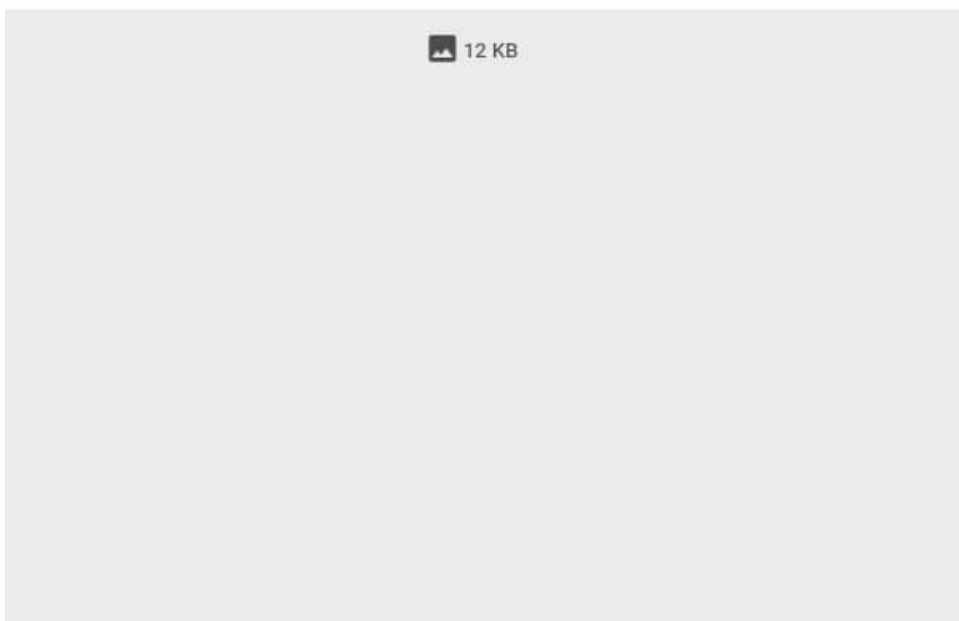
Please Wait...

Two cars P and Q start at the same time from A and B which are 120km apart. If the two cars travel in opposite directions, they meet after one hour and if they travel in same direction (from A towards B), then P meets Q after 2 hours. What is the speed of car P?

- A) 60kmph
- B) 70kmph
- C) 120kmph
- D) Data inadequate
- E) None of these

Please Wait...

Please Wait





Seplat Petroleum Development Company Plc

Test - NPDC/SEPLAT Undergraduate Scholarship Screening Test 2018/2019

Test -
You are taking the following test:

Name NPDC/SEPLAT Undergraduate Scholarship Screening Test 2018/2019

Timer Time Remaining (minutes:seconds): 35:45

Progress
You have completed 9 out of 30 questions.

Instructions +

Question
Use the Submit -> Forward button to save your answer and move to the next question.

Calculator

- 10) Roberts is told by his line manager that his work is not up to standard and that he must enroll on a specific course. Which of the following issues is the manager dealing with
- A) Training
 - B) Grievance
 - C) Promotion
 - D) Demotion

Submit -> Forward

Stop and Restart/Resume Later

taking the following test:

NPDC/SEPLAT Undergraduate Scholarship Screening Test 2018/2019

Time Remaining (minutes:seconds) : 13:03

s
e completed 24 out of 30 questions.

ctions +

n
Submit -> Forward button to save your answer and move to the next question.

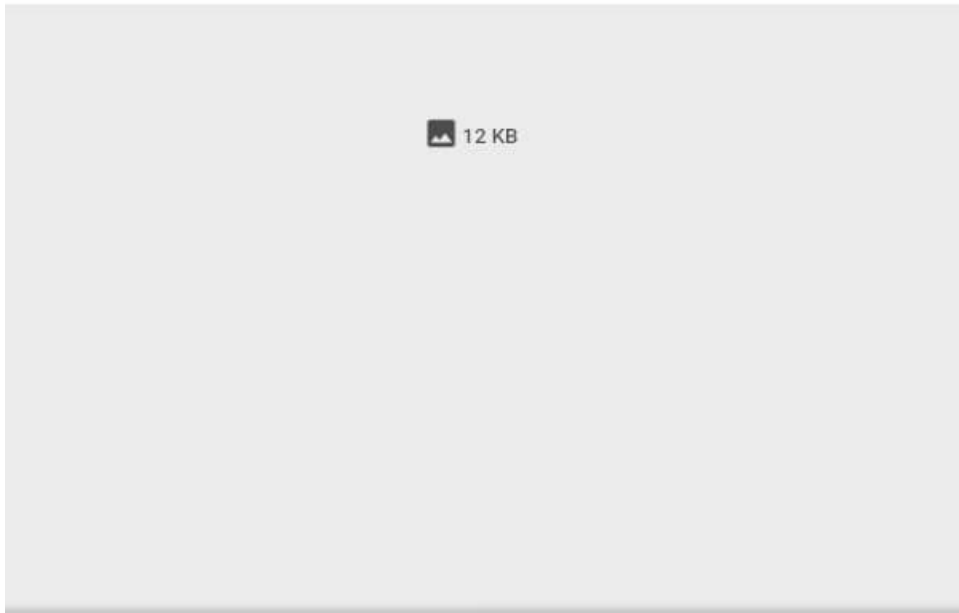
lator

If the height of a triangle is decreased by 40% and its base is increased by 40%, what will be the effect on its area?

- A) No change
- B) 8% decrease
- C) 16% increase
- D) None of these

it -> Forward

Stop and Restart/Resume La



Saved data Show original



Timer Time Remaining (minutes:seconds) : 43:00

Progress
You have completed 2 out of 30 questions.

Instructions +

Question
Use the Submit -> Forward button to save your answer and move to the next question.

Calculator

- 3) Advertiser: The revenue that newspapers and magazines earn by publishing advertisements allows publishers to keep the prices per copy of their publications much lower than would otherwise be possible. Therefore, consumers benefit economically from advertising. Consumer: But who pays for the advertising that pays for low-priced newspapers and magazines? We consumers do, because advertisers pass along advertising costs to us through the higher prices they charge for their products. Which of the following best describes how the consumer counters the advertiser's argument
- A) By alleging something that, if true, would weaken the plausibility of the advertiser's conclusion.
 - B) By questioning the truth of the purportedly factual statement on which the advertiser's conclusion is based.
 - C) By offering an interpretation of the advertiser's opening statement that, if accurate, shows that there is an implicit contradiction in it.
 - D) By pointing out that the advertiser's point of view is biased.

Submit -> Forward

Stop and Restart/Resume Later

Test - NPDC/SEPLAT Undergraduate Scholarship Screening Test 2018/2019

Test -

You are taking the following test:

Name NPDC/SEPLAT Undergraduate Scholarship Screening Test 2018/2019

Timer Time Remaining (minutes:seconds) : 40:50

Progress

You have completed 4 out of 30 questions.

Instructions +

Question

Use the Submit -> Forward button to save your answer and move to the next question.

Calculator

- 5) Six months or so after getting a video recorder, many early buyers apparently lost interest in obtaining videos to watch on it. The trade of businesses selling and renting videos is still buoyant, recorders is still growing. But clearly, once the market for video recorders is saturated, businesses distributing videos face hard times. Which of the following, if true, would most seriously weaken the conclusion above?
- A) The market for video recorders would not be considered saturated until there was one in 80 percent of homes.
 - B) Among the items handled by video distributors are many films specifically produced as video features.
 - C) Few of the early buyers of video recorders raised any complaints about performance aspects of the new product.
 - D) The early buyers of a novel product are always people who are quick to acquire novelties, but also often as quick to tire of them.

Submit -> Forward

Stop and Restart/Resume Later

taking the following test:

NPDC/SEPLAT Undergraduate Scholarship Screening Test 2018/2019

Time Remaining (minutes:seconds) : 12:06

Completed 24 out of 30 questions.

Actions +

Submit -> Forward button to save your answer and move to the next question.

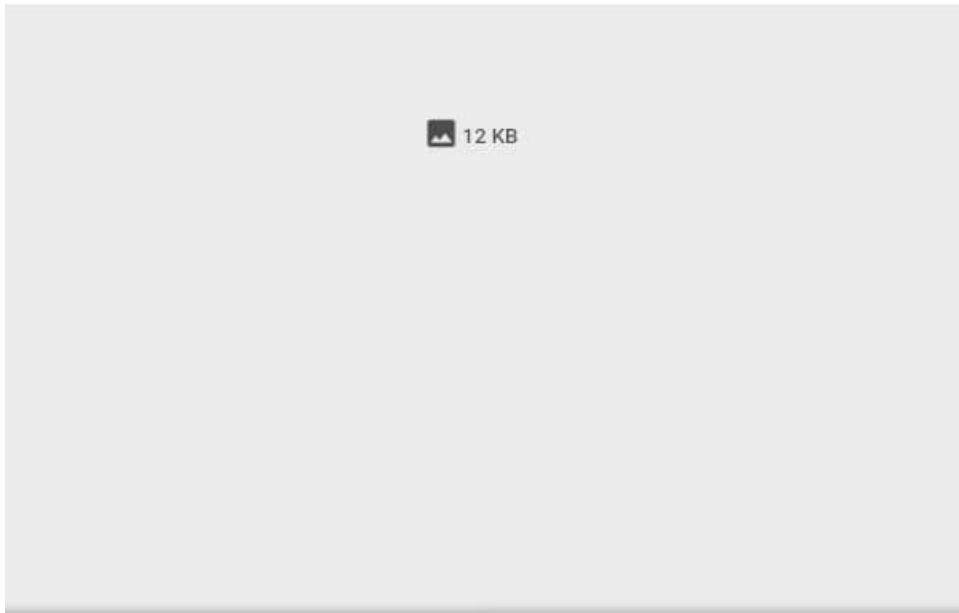
Please Wait...

If the height of a triangle is decreased by 40% and its base is increased by 40%, what will be the effect on its area?

- A) No change
- B) 8% decrease
- C) 16% increase
- D) None of these

Please Wait...

Please Wait



Saved data Show original



Test -

You are taking the following test:

Name NPDC/SEPLAT Undergraduate Scholarship Screening Test 2018/2019

Timer Time Remaining (minutes:seconds) : 44:40

Progress

You have completed 0 out of 30 questions.

Instructions +

Question

Use the Submit -> Forward button to save your answer and move to the next question.

Calculator

1) **Effective communication involves four elements. Which of the following is not one of those four?**

- A) the receiver
- B) the medium
- C) the transformer
- D) the message

Submit -> Forward

Stop and Restart/Resum

You are taking the following test:

Name NPDC/SEPLAT Undergraduate Scholarship Screening Test 2018/2019

Timer Time Remaining (minutes:seconds) : 22:34

Progress
You have completed 19 out of 30 questions.

Instructions +

Question
Use the Submit -> Forward button to save your answer and move to the next question.

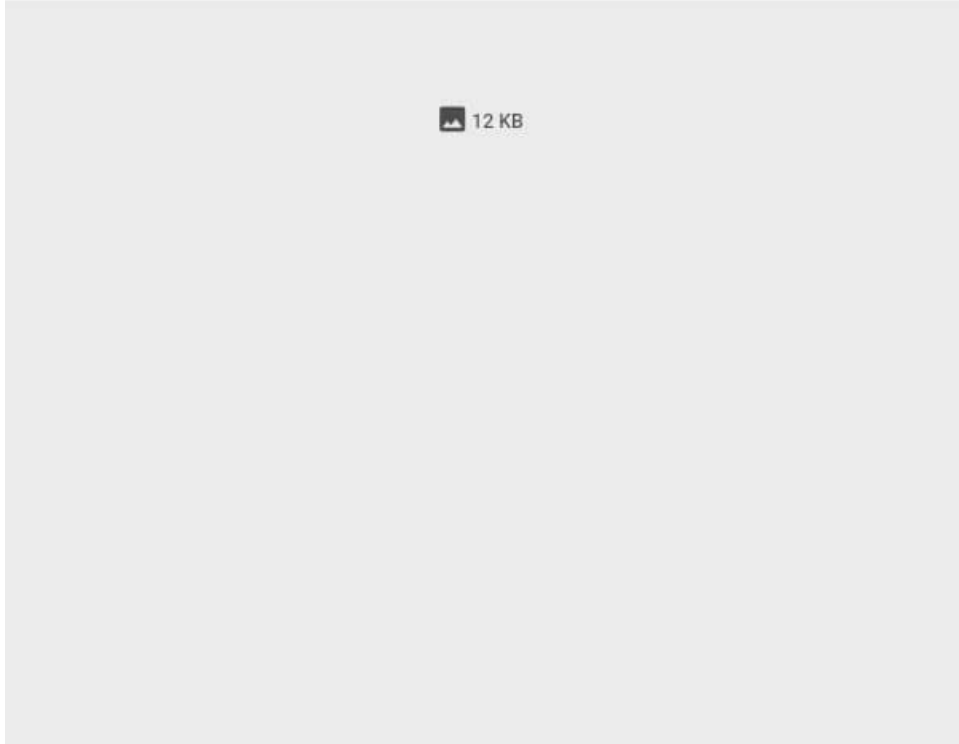
Calculator

20) We should _____ with the dowry practice

- A) do with
- B) do up
- C) do for
- D) do away with

Submit -> Forward

Stop and Restart/Resume Later



Timer Time Remaining (minutes:seconds) : 39:26

Progress

You have completed 5 out of 30 questions.

Instructions +

Question

Use the Submit -> Forward button to save your answer and move to the next question.

Calculator

- 6) A curriculum vitae is a
- A) Brief history of the individual
 - B) List of the school curriculum studied
 - C) List of extra - curriculum activities
 - D) A university degree

Submit -> Forward

Stop and Restart/Res

4 KB

Test - NPDC/SEPLAT Undergraduate Scholarship Screening Test 2018/2019

You are taking the following test:

Name NPDC/SEPLAT Undergraduate Scholarship Screening Test 2018/2019

Timer Time Remaining (minutes:seconds): 26:37

Progress You have completed 13 out of 30 questions.

Instructions

Question Use the Submit -> Forward button to save your answer and move to the next question.

Please Wait...

14) 3, 7, 15, 31, 63, 1

- A) 92
- B) 127
- C) 115
- D) 131

Please Wait...

Please Wait...

12 KB

4 KB

Test - NPDC/SEPLAT Undergraduate Scholarship Screening Test 2018/2019

Test -
You are taking the following test:

Name NPDC/SEPLAT Undergraduate Scholarship Screening Test 2018/2019

Timer Time Remaining (minutes:seconds): 29:46

Progress
You have completed 10 out of 30 questions.

Instructions +

Question
Use the Submit -> Forward button to save your answer and move to the next question.

Please Wait...

- 11) 0, 7, 5, 7, 4, 9
- A) 3
 - B) 7
 - C) 8
 - D) 9

Please Wait...

Please Wait...

12 KB